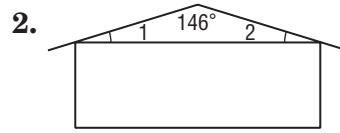


4-2 Skills Practice

Angles of Triangles

Find the measure of each numbered angle.

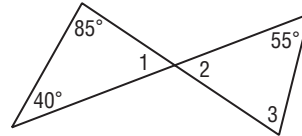


Find each measure.

3. $m\angle 1$

4. $m\angle 2$

5. $m\angle 3$

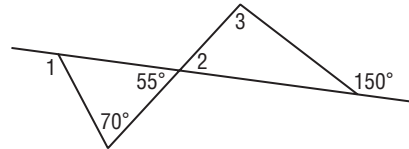


Find each measure.

6. $m\angle 1$

7. $m\angle 2$

8. $m\angle 3$



Find each measure.

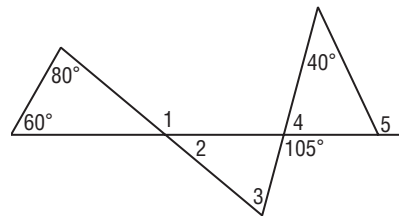
9. $m\angle 1$

10. $m\angle 2$

11. $m\angle 3$

12. $m\angle 4$

13. $m\angle 5$



Find each measure.

14. $m\angle 1$

15. $m\angle 2$

